



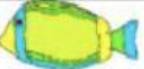










# PROBLEM SOLVING

- 1) There are 6 .  
5 more  come.  
How many are there in all?
- 2) I have 7 .  
I buy 5 more .  
How many do I buy in all?
- 3) Bert has got 4 .  
Bill has got 8 .  
How many have they got in all?
- 4) Tom eats 8 .  
Ann eats 5 .  
How many  do they eat in all?
- 5) I buy 7 .  
I buy 4 .  
How many   do I buy in all?