

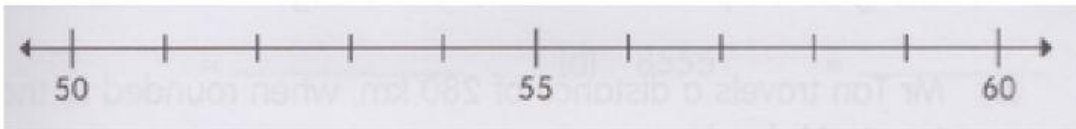
Worksheet 6 / Chapter 1

Name : _____ Marks : _____/_____

Class : _____ Date : _____

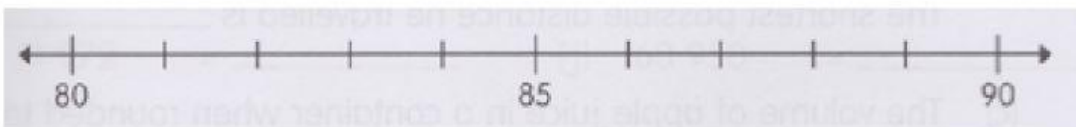
1. Round each value to the nearest ten.

a. A camera costs \$58.



\$58 is \$ _____ when rounded to the nearest \$10.

b. A swimming pool is 84 m long.




84 m is _____ m when rounded to the nearest 10 m.

2. Round each number to the nearest ten.

| Number | ≈ | Rounded to the nearest ten | Number | ≈ | Rounded to the nearest ten |
|-----------|---|----------------------------|-----------|---|----------------------------|
| a. 3247 | ≈ | _____ | b. 6995 | ≈ | _____ |
| c. 9023 | ≈ | _____ | d. 8094 | ≈ | _____ |
| e. 5004 | ≈ | _____ | f. 39 462 | ≈ | _____ |
| g. 14 339 | ≈ | _____ | h. 19 997 | ≈ | _____ |
| i. 63 098 | ≈ | _____ | j. 80 003 | ≈ | _____ |


3. Round each value to the nearest hundred.

a. A sofa costs \$836.



\$ 836 is \$ _____ when rounded to the nearest \$100.

b. A swimming pool contains 34 592 l of water.



34 592 l is _____ when rounded to the nearest 100 l.

4. Round each number to the nearest hundred.

| Number | Rounded to the nearest hundred | Number | Rounded to the nearest hundred |
|-----------|--------------------------------|-----------|--------------------------------|
| a. 576 | ≈ _____ | b. 829 | ≈ _____ |
| c. 390 | ≈ _____ | d. 8555 | ≈ _____ |
| e. 3929 | ≈ _____ | f. 33 319 | ≈ _____ |
| g. 19 476 | ≈ _____ | h. 28 266 | ≈ _____ |
| i. 11 972 | ≈ _____ | j. 60 950 | ≈ _____ |

5. Round each number to the nearest thousand.

a. A laptop costs \$2750.



\$ 2750 is \$ _____ when rounded to the nearest \$1000.

b. A bedroom set costs \$18 499.



\$ 18 499 is \$ _____ when rounded to the nearest \$ 1000.

6. Complete the table.

| Number | Rounded to the nearest | | |
|-----------|------------------------|---------|----------|
| | ten | hundred | thousand |
| a. 1089 | | | |
| b. 2843 | | | |
| c. 52 719 | | | |
| d. 78 362 | | | |
| e. 81 234 | | | |