



## Orientation Week 1 - Day 3

### Worksheet 1


#### Making Number Patterns

---

1. What is 1 more?


Write the number.

a.




\_\_\_\_\_.

b.



\_\_\_\_\_.

c.




\_\_\_\_\_.



2. What is 1 less?

Write the number.

a.



\_\_\_\_\_.

b.



\_\_\_\_\_.

c.



\_\_\_\_\_.