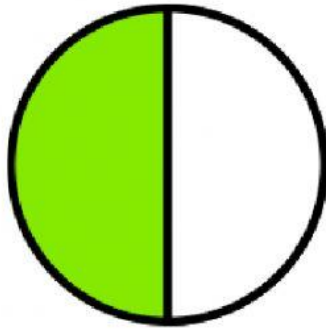


Name _____

M-Fractions 6


Identify the fraction shown in the picture. (Multiple choice)



$$\frac{1}{2}$$

$$\frac{3}{4}$$

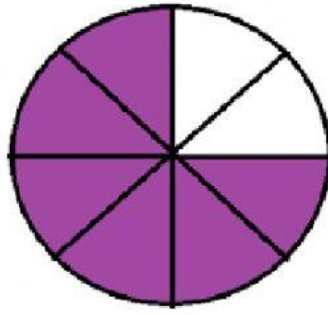
$$\frac{2}{1}$$



$$\frac{3}{4}$$

$$\frac{1}{4}$$

$$\frac{4}{4}$$



$$\frac{5}{8}$$

$$\frac{8}{6}$$

$$\frac{6}{8}$$

Parents, siblings, helpers,

Please take a minute to fill out this "Exit Slip" to help us assess the level of understanding for this assignment.

- 1 - Student needed to have the answers fed to them.
- 2- Student needed a lot of help to arrive at the correct answer.
- 3- Student needed just a little help to arrive at the correct answer.
- 4- Student completed the task independently. (Technical issues aside)

Enter a number here _____

Relationship to the student _____

Questions? Comments? (use this space)

Thank You - Remember: "Email my answers to my teacher"