


Today is National Onion Ring Day!

1. How many onion rings?




2

4

5

2. At Stephie's Burger Café, each burger gets 2 onion rings on top. How many onion rings do I need to make for 2 burgers?




4

2

6

3. At Jackson's Burger Place, each burger platter comes with a side of 5 onion rings. Someone ordered 3 burger platters. How many onion rings will Jackson have to make?




4

15

27

4. At Lisa's Snack Bar, Lisa makes 6 onion rings out of each onion. How many onion rings would she be able to make with 4 onions?

$$6 \times 4$$



6

4

24

