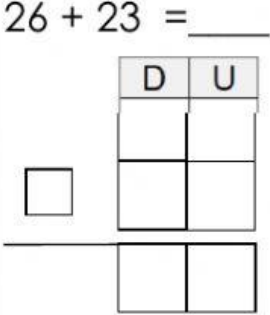
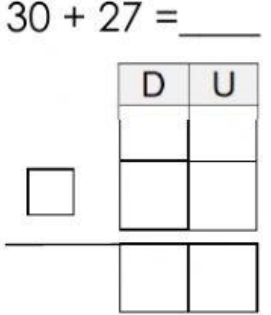
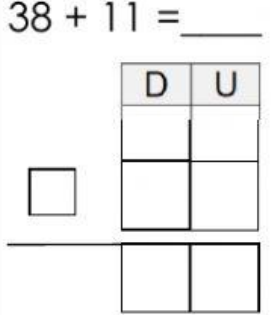
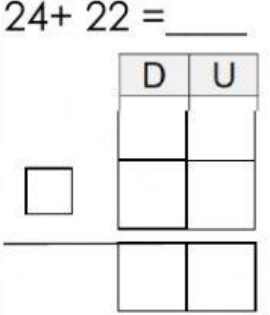
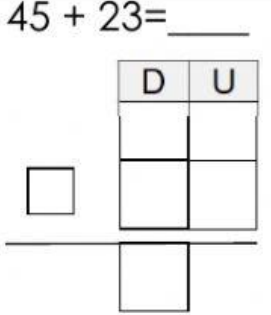
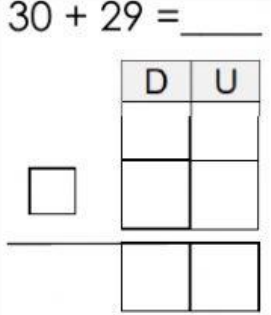
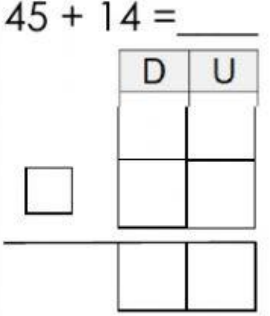
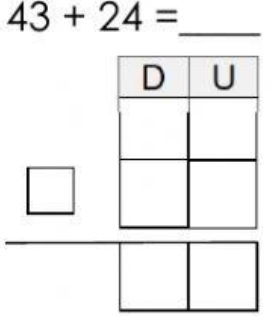
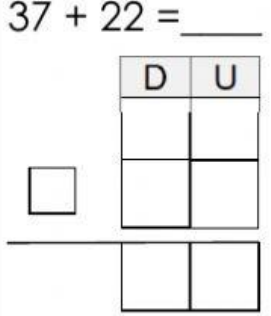


Nome: \_\_\_\_\_ (1º e último)

1- Calcula.

$26 + 23 = \underline{\quad}$ 	$30 + 27 = \underline{\quad}$ 	$38 + 11 = \underline{\quad}$ 
$24 + 22 = \underline{\quad}$ 	$45 + 23 = \underline{\quad}$ 	$30 + 29 = \underline{\quad}$ 
$45 + 14 = \underline{\quad}$ 	$43 + 24 = \underline{\quad}$ 	$37 + 22 = \underline{\quad}$ 

2- Completa de acordo com as setas.

$12 \xrightarrow{-2} \square \xrightarrow{-3} \square \xrightarrow{-3} \square \xrightarrow{+4} \square \xrightarrow{-4} \square$

$9 \xrightarrow{+2} \square \xrightarrow{-3} \square \xrightarrow{-3} \square \xrightarrow{-4} \square \xrightarrow{+4} \square$