




THE PLATES MOVEMENTS

1. THE NAME OF EACH MOVEMENT



DIVERGENT	DIVERGENT	DIVERGENT
CONVERGENT	CONVERGENT	CONVERGENT
FRICTION	FRICTION	FRICTION

2.SELECT THE CORRECT OPTION

WHAT LAYER IS LOCATED IN THE LITHOSPHERE?

CRUST

MANTLE

WHAT LAYER IS LOCATED IN THE ASTHENOSPHERE?

CRUST

MANTLE