

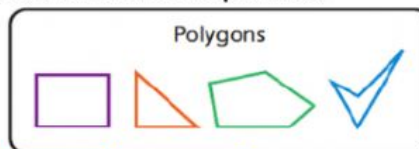
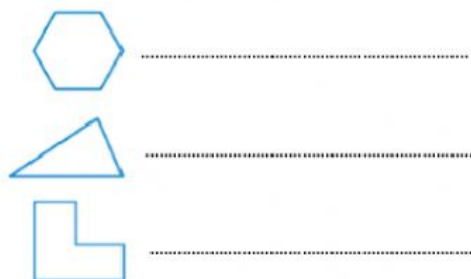


Name:

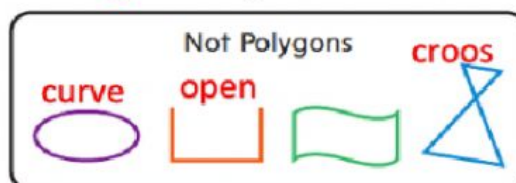
Date:08/06/2020

Read each question carefully. Write the letter for your answer on the line provided.

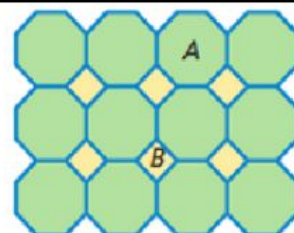
**Q1 : Name each polygon and
Determined regular or not regular:**

**Regular polygons.**


- **Congruent** sides
- **Congruent** angles

**Q2 : problem solving :**

1. What polygon make up the design ?
2. Describe polygon B as regular or not regular ?
3. How many sides in polygon A ?

**Test Practice**

10. Which of the following figures is a polygon?

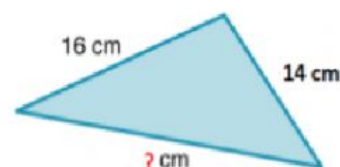
**Choose the correct answer :**

1. The figure shows a scalene triangle .. The length = ?

a. 16 cm

b. 14 cm

c. 23 cm



2. Which is an equilateral triangle ?

a. 2m , 2m , 5m

b. 5m , 5m , 5m

c. 2m , 5m , 5m