










## Telling the time: Exercises

### 1) Ecoute les heures et écris-les en chiffres!

1.  _____	4.  _____	7.  _____
2.  _____	5.  _____	8.  _____
3.  _____	6.  _____	9.  _____

### 2) Ecris les heures de 2 façons différentes

	Méthode 1	Méthode 2
21:00 →	It's _____	It's _____
16:11 →	It's _____	It's _____
03:52 →	It's _____	It's _____
12:30 →	It's _____	It's _____
18:45 →	It's _____	It's _____
02:36 →	It's _____	It's _____
22:18 →	It's _____	It's _____
10:48 →	It's _____	It's _____
15:15 →	It's _____	It's _____
08:57 →	It's _____	It's _____