

https://www.youtube.com/watch?v=n0FZhQ_GkKw



 Click Here to Watch Now!

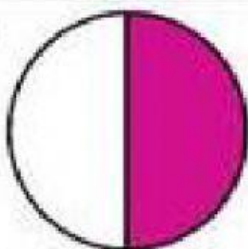
<https://www.youtube.com/watch?v=yT1WuyxTCmo>



 Click Here to Watch Now!

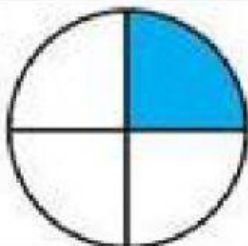
1. Select the correct answer for each of the following fractions

1.



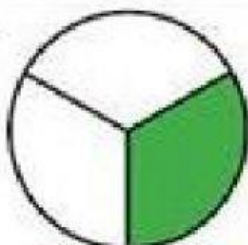
☐ $\frac{2}{3}$
 ☐ $\frac{2}{4}$
 ☐ $\frac{1}{4}$
 ☐ $\frac{1}{2}$

2.



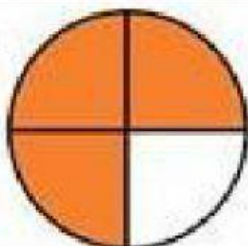
☐ $\frac{1}{2}$
 ☐ $\frac{3}{4}$
 ☐ $\frac{1}{4}$
 ☐ $\frac{1}{3}$

3.



☐ $\frac{3}{4}$
 ☐ $\frac{1}{2}$
 ☐ $\frac{2}{3}$
 ☐ $\frac{1}{3}$

4.



☐ $\frac{2}{4}$
 ☐ $\frac{3}{4}$
 ☐ $\frac{1}{3}$
 ☐ $\frac{1}{4}$

5.



☐ $\frac{2}{3}$
 ☐ $\frac{1}{3}$
 ☐ $\frac{2}{4}$
 ☐ $\frac{3}{4}$

