

ĐỀ THI THỬ SỐ 17

Thời gian làm bài: 45 phút (không kể thời gian phát bài)

Question 1:

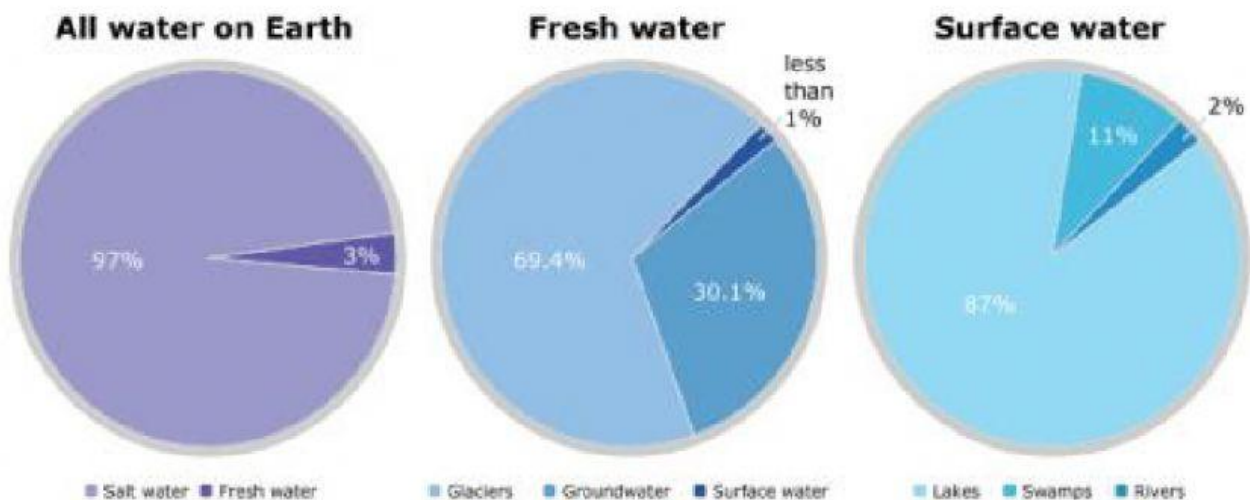
Which idiom describes the fear and cowardliness?

- A. Miệng hùm nọc rắn B. Nhường cơm xẻ áo
C. Gan vàng dạ sắt D. Miệng hùm gan sứa

Question 2:

A tiny fraction of Earth's fresh water is flowing on the surface of continents in rivers, lakes, and swamps. This water is shown in the graph of surface water on the far right.

Use the graph to select the TRUE statement.

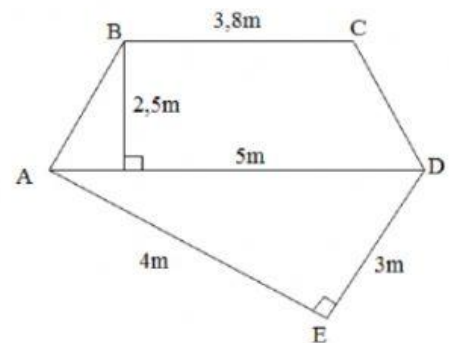


- A. The graph of surface water does not show water that is frozen in glaciers.
B. The graph showing fresh water includes water in lakes.
C. The graph of surface water shows most of Earth's fresh water.
D. All the graphs show the same amount of water.

Question 3:

A plot has the following shape and size. What is the area of the plot?

- A. 11m^2 B. 15m^2
C. 17m^2 D. 20m^2



Question 4:

Read the passage and fill in the blank:

"In the year 1885, after the counter-attacks in Hue, he helped King Ham Nghi to the mountainous areas of Quang Tri, and executed the order of Chieu Can Vuong. From there, the Can Vuong movement against the French colonial rule started, and lasted strongly until the end of the XIX century."

Which historical character is "he" referred to in the passage?

- A. Ton That Thuyet B. Nguyen Truong To C. Truong Dinh D. Nguyen Trung Truc

Question 5:

Generally, common salt is collected from the vaporization of:

- A. Sea water B. fresh water C. brackish water D. mineral water

Question 6:

There are 7 people at the party. If each person shakes hand once with all the others, how many hand-shakes take place at the party?

- A. 18 B. 21 C. 36 D. 72

Question 7:

John Lennon, the lead singer of the legendary band THE BEETLES, once said:

"When I was 5 years old, my mother always told me that happiness was the key to life. When I went to school, they asked me what I wanted to be when I grew up, I wrote down 'HAPPY'."

Who first made John aware of the value of happiness in life?

- A. Himself B. his mother C. his teachers D. nobody

Question 8:

Read the following paragraph extracted from the website vantieuhoc.com and answer the question:

"My father looks tall and rather thin. He has got thick eyebrows and a little moustache. He has got very bright eyes. He is always a good role model for me as I grow up. He is hard-working, patient and understanding; he also has a good sense of humour and seems to get on well with everybody. Hopefully, I have inherited some of these traits. He enjoys watching TV especially new programs, playing chess with my neighbours and taking care of his grandchildren."

Which details of the father does the paragraph describe?

- A. His appearance, personalities and hobbies B. His appearance, personalities and job
C. His activities, hobbies and job D. His personalities, hobbies and job

Question 9:

Experiment: Pour boiling the solution of salt water into a cup, cover the cup with a dish, after about 1 minute, which phenomenon will you see?

- A. No phenomenon takes place B. Only salt will remain in the bottom of the cup
C. There are tasteless water drops on the dish D. There are white crystals on the dish

Question 10:

Which of the following provinces or cities are abundant in limestone?

- A. Quang Ninh, Ninh Binh, Nam Dinh B. Nam Dinh, Thai Binh, Ha Noi
C. Quang Ninh, Ninh Binh, Quang Binh D. Ninh Binh, Thanh Hoa, Nghe An

Question 11:

Which is not soluble in water?

- A. salt B. sugar C. cooking oil D. flour

Question 12:

Which province contains the southernmost point (điểm cực nam) of Vietnam?

- A. Mui Ca Mau B. Ha Giang C. Ha Tien D. Nha Trang

Question 13:

Four friends eat four pizzas that are the same size. John has a quarter left, Alex has two thirds left, Sandy has five sixths left and David has a half left.

Who ate the most pizza?

- A. John B. Alex C. Sandy D. David

Question 14:

Which of the following sentences correctly defines the word "CITIZEN"?

- A. A citizen is a person who does public work and community service
B. A citizen is a manual and salaried worker.
C. A citizen is a person who has legal rights and obligations towards his/her country
D. A citizen is a well-known person or a public figure.

Question 15:

You have an intention of holding a birthday party at home. You have prepared a variety of foods for your classmates. After class, you stand before the class and tell them your plan.

What is the purpose of your presentation in class?

- A. To tell them how you have prepared the party
B. To invite them to the party
C. To share the joy with them
D. To tell them the purpose of the party

Question 16:

What will happen if we drop some lemon juice on limestone?

- A. Nothing will happen.
B. The limestone's color will change
C. the limestone will effervesce.
D. The limestone will effervesce and there will be gas coming out.



Question 17:

Look at the 4-circle Rule in "The manual for children harassing and kidnapping prevention".

Who has the right to embrace you according to the rule?

- A. Your parents B. your teachers C. Your brothers D. your friends

Question 18:

Which of the following is the antonym of "*hòa bình*"?

- A. bình yên B. yên tĩnh C. chiến tranh D. hiền hòa

Question 19:

Which of the following can be produced from iron core?

- A. aluminum and copper B. cast iron and steel C. Steel and copper D. Lead and aluminum

Question 20:


A bank's deposit interest rate is 0.25% per month. A man deposits ten million VND into his account. What is his total amount of money after one month?

- A. 10,025,000 VND B. 10,250,000 VND
C. 12,500,000 VND D. 10,002,500 VND

Question 21:

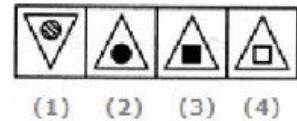
Select a suitable figure from the 4 alternatives that would complete the figure matrix.

- A. 1 B. 2 C. 3 D. 4

**Question 22:**

Which diseases are caused by drinking much alcohol?

- A. Diseases of the digestive, circulatory, and nervous system
B. skin diseases
C. Diseases of the respiratory system
D. HIV/AIDS

**Question 23:**

Read the information and the question, then choose the correct answer:

Câu 1: Tre non dễ uốn.	Câu 2: Uốn cây từ thuở còn non Dạy con từ thuở con còn ngây thơ
Câu 3: Trẻ lên ba cả nhà học nói	Câu 4: Trẻ cây cha, già cây con

Which of the above-mentioned folk verses do NOT belong with the other ones?

- A. Câu 3. B. Câu 4. C. Câu 2. D. Câu 1.

Question 24:

Arrange 3 red marble with different radius and 3 green identical marbles into a series of 7 squares. How many ways are there to arrange 3 red marble next to another and 3 green marbles together?

- A. 36 B. 63 C. 6 D. 100