

Culminating Assessment: Coins – Pennies




1. Click on all of the pennies below.



2. How much is a penny worth?

\$0.05	\$0.01	\$20.00
---------------	---------------	----------------

3. What is a penny made out of?

		
copper	nickel	aluminum

4. How does the color of a penny change over time/when exposed to oxygen?



