

**Individual Task - 4 (04.06.2020) Classify Triangles (on LMS).**  
**Instructions:** Complete all the tasks.  
 Post your answers on LMS.

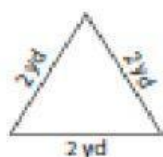
Answer the question.

**Identifying Triangles**

Sides - Numerals: 51

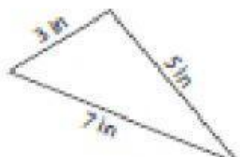
Identify each triangle based on sides. (Equilateral, Isosceles or Scalene)

1)

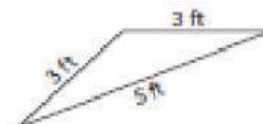


Equilateral triangle

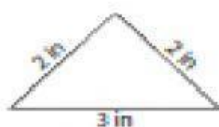
2)



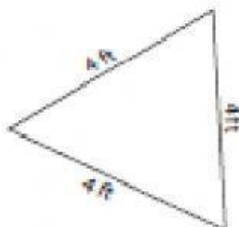
3)



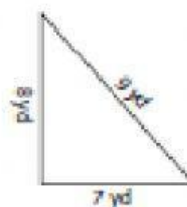
4)



5)



6)



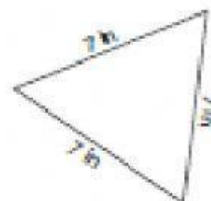
7)



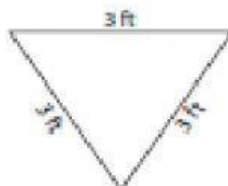
8)



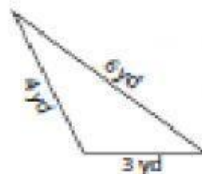
9)



10)



11)



12)

