

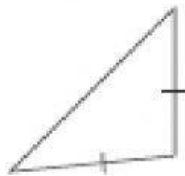
**Individual Task - 2 (04.06.2020) Classify Triangles (on LMS).**  
**Instructions:** Complete all the tasks.  
 Post your answers on LMS.  
 Answer the question.

### Identifying Triangles

Angles or Sides: 51

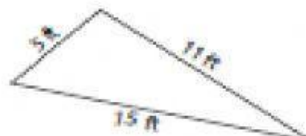
Identify each triangle based on angles or sides.

1)

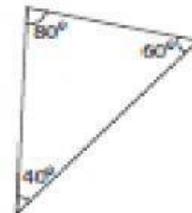


Isosceles triangle

2)



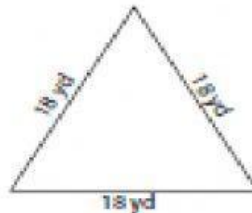
3)



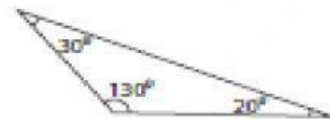
4)



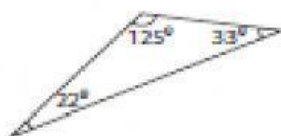
5)



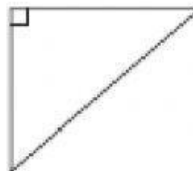
6)



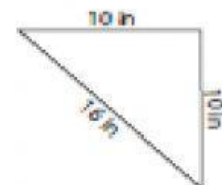
7)



8)



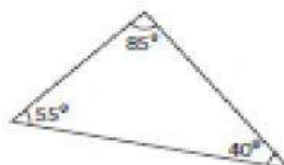
9)



10)



11)



12)

