

HO IMPARATO

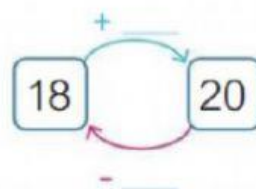
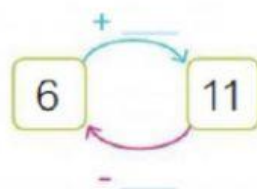
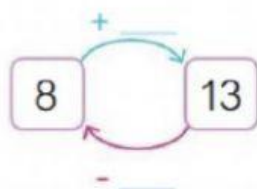
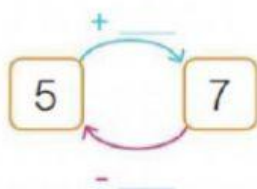
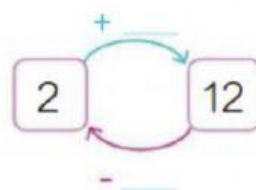
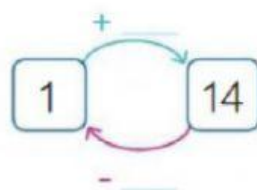
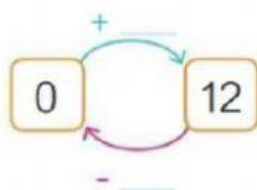
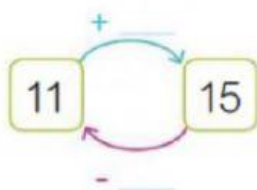
■ □ CALCOLA, AUTATI CON LA LINEA DEI NUMERI.



$13 + 4 = \underline{\quad}$ $0 + 11 = \underline{\quad}$ $9 + 6 = \underline{\quad}$ $17 + 3 = \underline{\quad}$

$20 - 8 = \underline{\quad}$ $17 - 6 = \underline{\quad}$ $12 - 5 = \underline{\quad}$ $19 - 9 = \underline{\quad}$

■ □ COMPLETA LE OPERAZIONI INVERSE.



■ □ COMPLETA LE TABELLE. OSSERVA GLI ESEMPI.

	6	8	3
11	17		
5			
9			

	4	1	9
20	16		
15			
12			

●● CALCOLA LE OPERAZIONI.

$12 + 3 = \underline{\quad}$ $11 + 5 = \underline{\quad}$ $20 - 2 = \underline{\quad}$ $17 - 1 = \underline{\quad}$

$9 + 9 = \underline{\quad}$ $16 + 3 = \underline{\quad}$ $19 - 4 = \underline{\quad}$ $18 - 9 = \underline{\quad}$

●● CALCOLA LE ADDIZIONI E LE SOTTRAZIONI. POI UNISCI LE OPERAZIONI INVERSE.

$12 + 3 = \underline{\quad}$

$10 + 9 = \underline{\quad}$

$15 + 2 = \underline{\quad}$

$9 + 5 = \underline{\quad}$

$19 - 9 = \underline{\quad}$

$15 - 3 = \underline{\quad}$

$14 - 5 = \underline{\quad}$

$17 - 2 = \underline{\quad}$

●● COMPLETA LE CATENE. FAI ATTENZIONE AGLI OPERATORI.

$8 \xrightarrow{+2} 10 \xrightarrow{+5} \underline{\quad} \xrightarrow{-6} \underline{\quad} \xrightarrow{+2} \underline{\quad} \xrightarrow{+4} \underline{\quad} \xrightarrow{-2} 13$

$17 \xrightarrow{-6} \underline{\quad} \xrightarrow{+3} \underline{\quad} \xrightarrow{-7} \underline{\quad} \xrightarrow{-5} \underline{\quad} \xrightarrow{+14} \underline{\quad} \xrightarrow{+2} 18$

CON QUALE OPERAZIONE PUOI SCOPRIRE QUANTI FOGLI HA USATO ANTONIO?
SE LO SAI, SCRIVI L'OPERAZIONE GIUSTA E CALCOLA A FIANCO DEL TESTO.
ANTONIO HA 15 FOGLI DI CARTA.
NE USA ALCUNI PER FARE DELLE
BARCHETTE E ALLA FINE HA 7
FOGLI DI CARTA. QUANTI FOGLI
HA USATO?