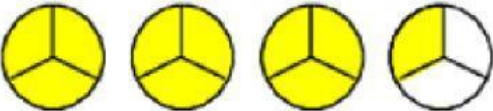



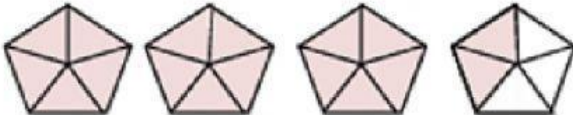



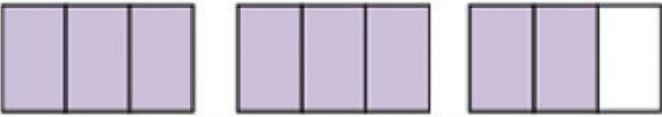
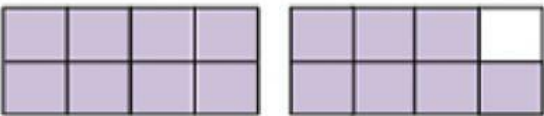




Writing **mixed number and improper fraction** by looking at shapes

Given the drawings and your job is to write an improper fraction and a mixed number for the colored shapes. First one is done as an example.

Shapes	Improper Fraction	Mixed Number
1) 	$\frac{10}{3}$	$3\frac{1}{3}$
2) 	_____	_____
3) 	_____	_____
4) 	_____	_____
5) 	_____	_____
6) 	_____	_____
7) 	_____	_____
8) 	_____	_____
9) 	_____	_____
10) 	_____	_____