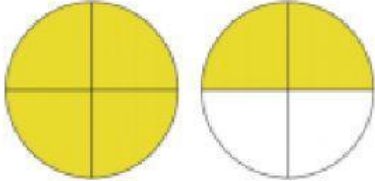

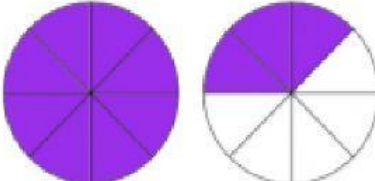

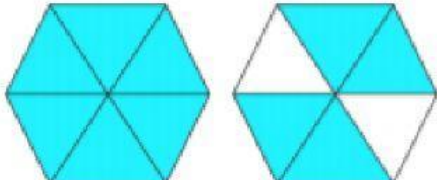
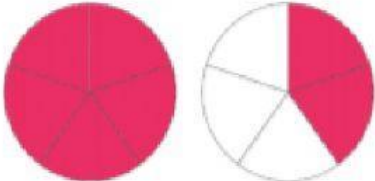




Look at the fraction models. Write the improper fractions and mixed numbers.

Fraction Model	Improper Fraction	Mixed Number
	<div style="text-align: center;">—</div>	<div style="text-align: center;">—</div>
	<div style="text-align: center;">—</div>	<div style="text-align: center;">—</div>
	<div style="text-align: center;">—</div>	<div style="text-align: center;">—</div>
	<div style="text-align: center;">—</div>	<div style="text-align: center;">—</div>
	<div style="text-align: center;">—</div>	<div style="text-align: center;">—</div>
	<div style="text-align: center;">—</div>	<div style="text-align: center;">—</div>