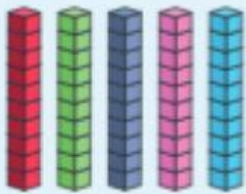


0 | 2 | 3 | 4 | 5 | 6 | 7 | 8 | 9 | 10 | 11 | 12 | 13 | 14 | 15 | 16 | 17 | 18 | 19 | 20

I count each group of ten and draw a line to the numeral it represents.

أعدُّ كُلَّ مَجْمُوعَةٍ مِنَ العَشْرَاتِ، وَأَصِلُهَا بِالرَّقْمِ الَّذِي تُمَثِّلُهُ.



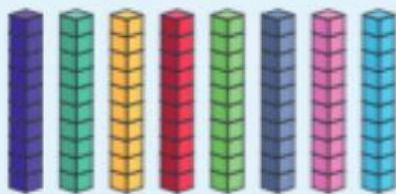
•

• 100



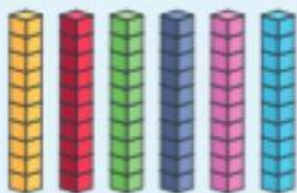
•

• 50



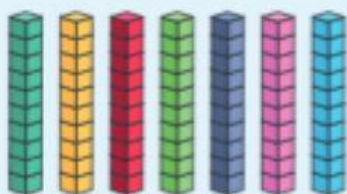
•

• 70



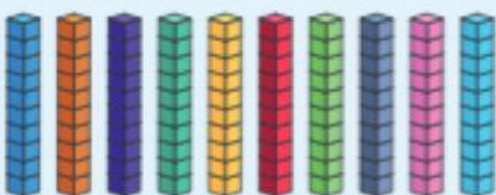
•

• 80



•

• 60



•

• 90