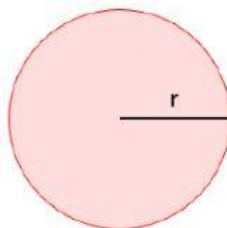


Name: _____

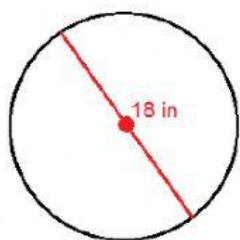
Date: _____

Mathematics
Circumference of a Circle

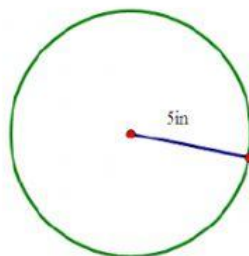


Circumference
of circle
 $C = 2\pi r$

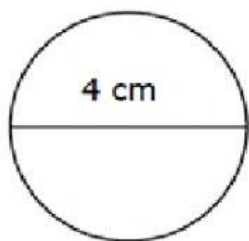
Use the formula to find the circumference of each circle.



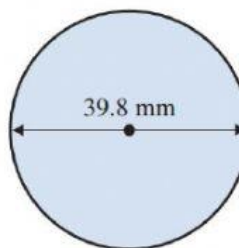
Ans: _____



Ans: _____



Ans: _____



Ans: _____

The radius of circle is 2.5 cm long. How long is the diameter?

Ans: _____

The diameter of circle is 15 cm long. How long is the radius?

Ans: _____

Created by: Ms. A. Bain