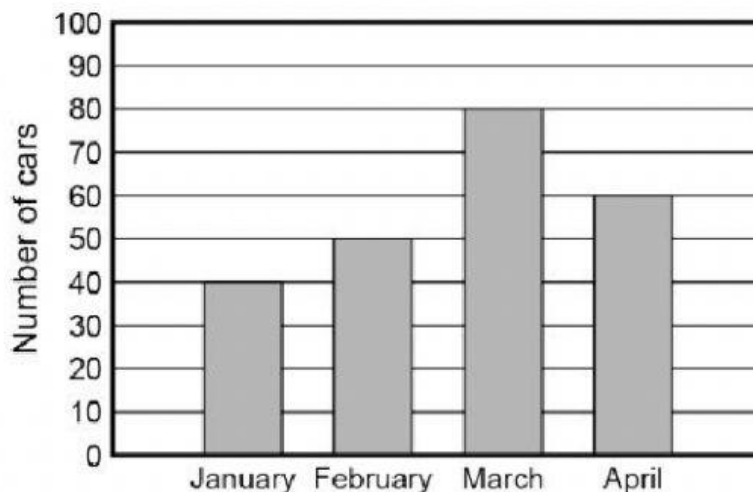


Name: \_\_\_\_\_

Date: \_\_\_\_\_

The graph below shows the number of cars that a dealership sold during the first 4 months of the year.

















Based on the graph, which statement is NOT true?


- A** The dealer sold a total of 230 cars during the 4 months.
- B** The dealer sold 20 more cars in March than in April.
- C** The dealer sold 170 cars during the first 3 months.
- D** The dealer sold 20 more cars in February than in January.

A school district pays its teachers for teaching their students. Which factor would most likely NOT affect the amount the school district pays its teachers?

- A** The number of years the teacher works
- B** The level of education the teacher has
- C** The size of the teacher's house
- D** None of the above

The graph below shows the number of hamburgers sold at a fast-food restaurant on different days of the week.

Day	Number of Hamburgers
Monday	 
Wednesday	  
Friday	   
Saturday	    

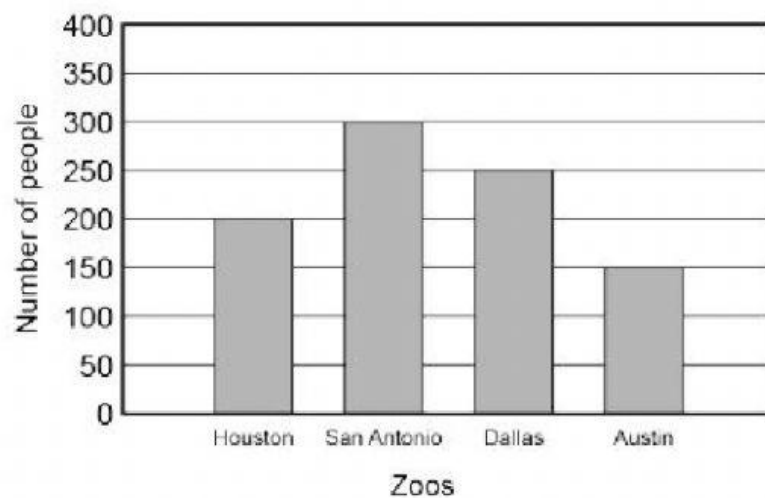
Each  means six hamburgers sold.

Based on the table, how many hamburgers were sold on Monday and Friday combined?

Record your answer and fill in the bubbles on your answer document. Be sure to use the correct place value.

			.
0	0	0	
1	1	1	
2	2	2	
3	3	3	
4	4	4	
5	5	5	
6	6	6	
7	7	7	
8	8	8	
9	9	9	

The graph below shows the number of people who attended different zoos in Texas on Monday.



How many more people attended the Houston Zoo and the San Antonio Zoo combined than the Austin Zoo?

- A** 500 people
- B** 450 people
- C** 350 people
- D** 150 people

Valentina wants to buy some new shoes. The shoes cost \$120, and she only has \$40. She asks to borrow the money from her grandma. Her grandma tells her she would have to pay the money back, plus interest. Which statement explains what Valentina's grandma means?

- F** Valentina would have to pay back less money.
- G** Valentina would have to pay back all the money, plus some extra money.
- H** Valentina wouldn't have to pay her grandma back.
- J** Valentina would have to pay back only the money borrowed.



Many people have started to drink tea instead of coffee. There is extra coffee at many stores that is not being bought. Which statement best describes the effect on the price of coffee due to the extra amount available?

- A** The price for coffee will decrease, because there is too much coffee.
- B** The price for coffee will decrease, because there is not enough coffee.
- C** The price of coffee will increase, because there is too much coffee.
- D** The price of coffee will increase, because there is not enough coffee.

A real estate company is selling a house. Three families are interested in buying the home. Which statement best describes how this will affect the price the house is sold for?

- A** The cost of the home will decrease, because more than one family is looking to buy the house.
- B** The cost of the home will increase, because more than one family is looking to buy the house.
- C** The cost of the home will remain the same, because more than one family is looking to buy the house.
- D** The cost of the house will increase, because the owner wants more money.