


## ESEGUI LE SEGUENTI MOLTIPLICAZIONI E DIVISIONI


$4 \times 3 = \square \square$




$6 \times 2 = \square \square$



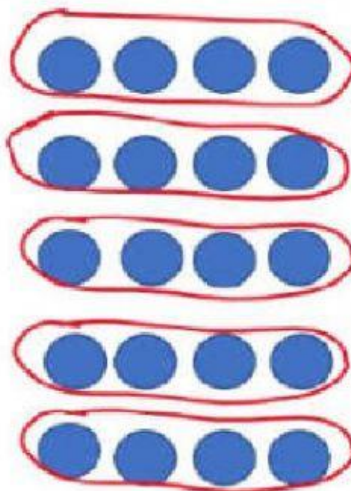
$3 \times 3 = \square$



$15 : 5 = \square$



$20 : 4 = \square$



$12 : 3 = \square$

