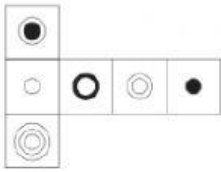
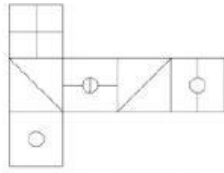
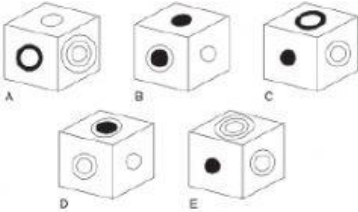


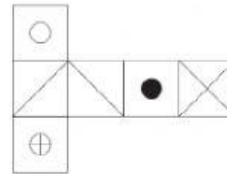
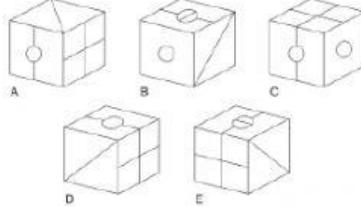
CUBES



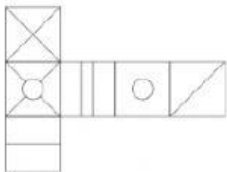
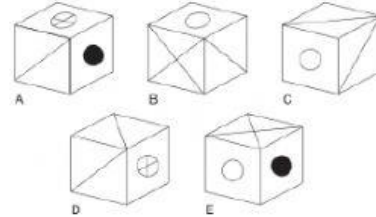
When the above is folded to form a cube, which is the only one of the following that *can* be produced?



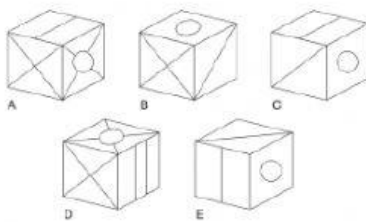
When the above is folded to form a cube, which is the only one of the following that *can* be produced?



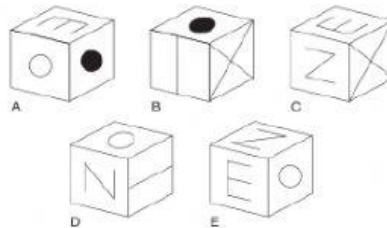
When the above is folded to form a cube, which is the only one of the following that *can* be produced?



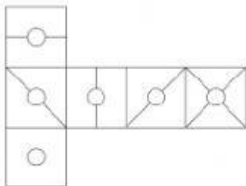
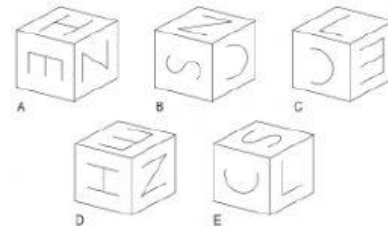
When the above is folded to form a cube, which is the only one of the following that *can* be produced?



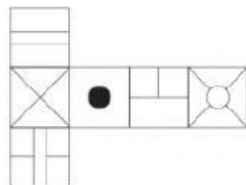
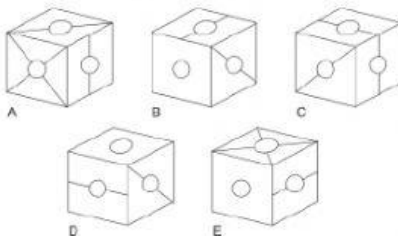
When the above is folded to form a cube, which is the only one of the following that *can* be produced?



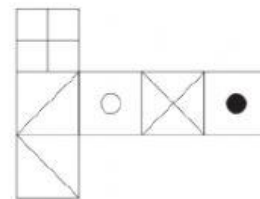
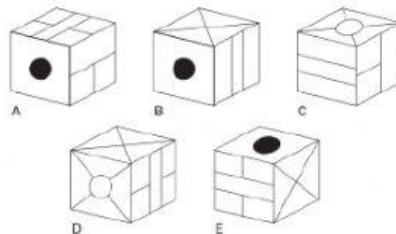
When the above is folded to form a cube, which is the only one of the following that *can* be produced?



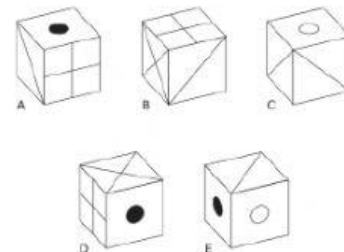
When the above is folded to form a cube, which is the only one of the following that *can* be produced?



When the above is folded to form a cube, which is the only one of the following that *can* be produced?



When the above is folded to form a cube, which is the only one of the following that *can* be produced?



A

1

2

3

4

B

1

2

3

4

C

1

2

3

4

D

1

2

3

4

E

1

2

3

4

F

1

2

3

4

G

1

2

3

4

H

1

2

3

4

I

1

2

3

4

J

1

2

3

4

K

1

2

3

4

L

1

2

3

4

M

1

2

3

4

N

1

2

3

4