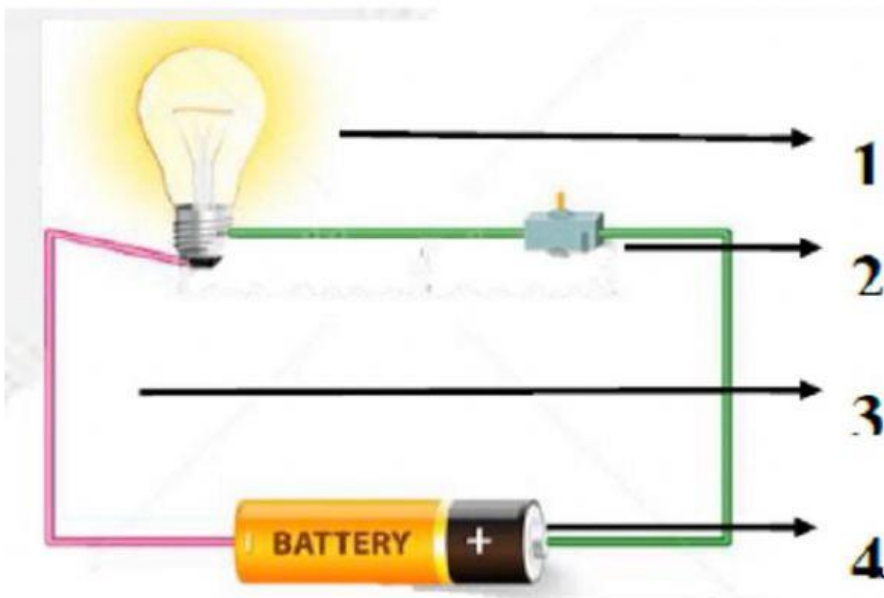


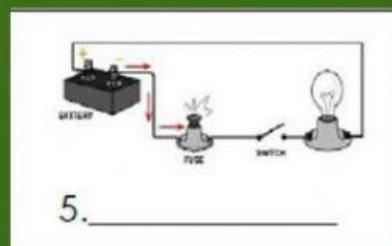
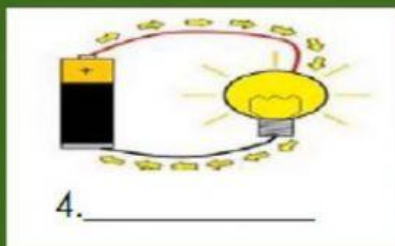
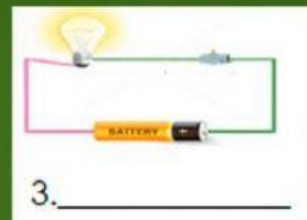

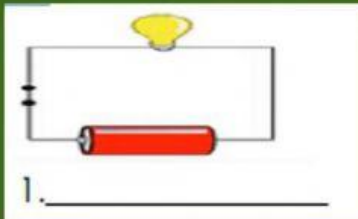


ACTIVITY SHEET IN SCIENCE FIVE- QUARTER 3 WEEK 4

DIRECTION: Label the following parts of Simple Circuit. Write your answer in the box



Identify the following picture if it is OPEN OR CLOSE CIRCUIT.





Republic of the Philippines  
**DEPARTMENT OF EDUCATION**  
Region IV-A CALABARZON  
**Schools Division Office of City of San Pedro**  
**SAN PEDRO CENTRAL ELEMENTARY SCHOOL**  
School ID 108432



**SAN PEDRO CENTRAL ELEMENTARY SCHOOL**  
Address : Luna St. Poblacion, City of San Pedro, Laguna  
Telephone No. : 02-870-648-28



**Learning Task 5.** Read each item carefully. Choose the letter of your answer.

1. It is the source of electrical energy.  
a. battery                      b. switch                      c. wire                      d. bulb
2. It is a circuit where electricity cannot flow.  
a. open circuit              b. closed circuit              c. battery                      d. switch
3. It connects the light bulb to the battery.  
a. wire                      b. source                      c. open circuit              d. bulb
4. It is used to open and close the circuit.  
a. switch                      b. source                      c. circuit                      d. bulb
5. It is a complete path of electricity.  
a. closed circuit              b. switch                      c. circuit                      d. open circuit

