

Fatima is thinking of a number.

She says

Double my  
number is 14.4

What number is Fatima thinking of?

Here are 4 digit cards.

3

4

5

7

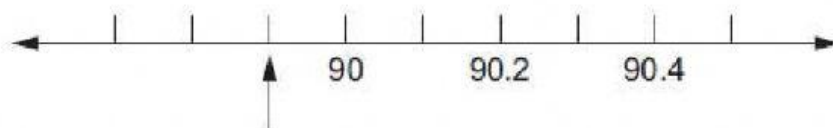
Use each card **once** to complete this number sentence.

$$\boxed{\phantom{0}} \boxed{2} . \boxed{\phantom{0}} > \boxed{6} \boxed{\phantom{0}} . \boxed{\phantom{0}}$$

Write in the missing number.


$$0.85 + \boxed{\phantom{000}} = 1$$

What number is the arrow pointing to on this number line?



[1]

Write the missing number.



(a) Round 8375 to the nearest thousand.

[1]

(b) Round 3.66 to the nearest tenth.

[1]

Here are four measurements.

20 cm

1 m

30 mm

2.5 cm

Order the measurements from smallest to largest.

smallest

largest



Draw a ring around **all** of the numbers that equal 9 when rounded to the nearest whole number.

8.07

8.8

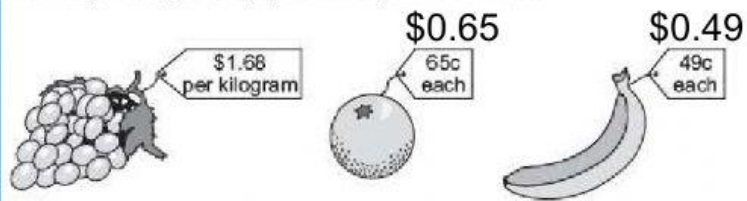
9.45

8.2

9.54

8.54

Khalid buys a kilogram of grapes, 2 oranges and a banana.



(a) How much is the total cost?

\$ ..... [1]

(b) How much change would Khalid get from a \$10 note?

\$ ..... [1]