

Lines, Line Segments, Rays

DIRECTION: Draw a line to match the picture to the description of the line/line segment/ Ray.

1.  

2. Line Segment **CJ** 

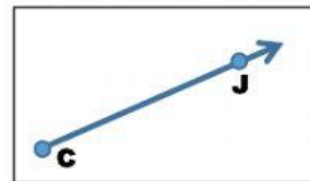
3.  

4. line MC 

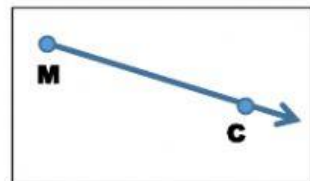
5. Ray MC 

6.  

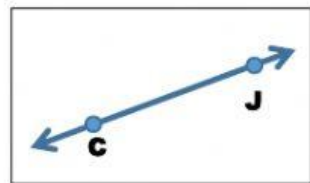
A



B




C



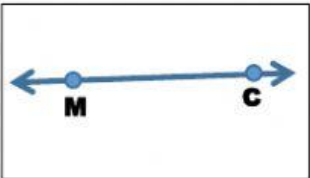
D



E



F



G

