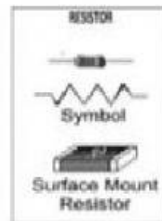



Directions. Classify the following electronic components whether it is **Passive Device** or **Active Device**. Write your answer on the space provided.

_____ 1.




_____ 2.



_____ 3.



_____ 4.



_____ 5.

