

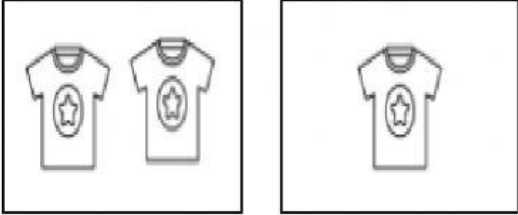
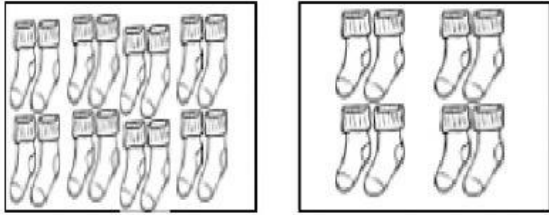

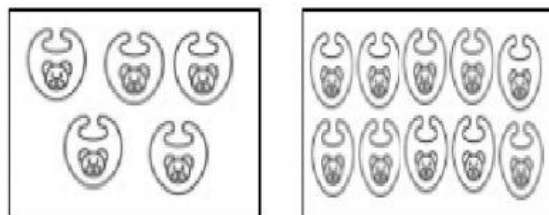
Escuela de Sophia of Caloocan, Inc.

3rd Quarterly Test KINDER 1 MATH

Name: _____ Raw Score: _____

Kinder 1: _____ Teacher: *T. Jhozel/ T.Geyl* Parent's Signature: _____


I. Put a check (✓) on the set of objects being asked in each number. (4pts)

| | |
|---|--|
| <p>1. Which is more?</p>  | <p>3. Which is less?</p>  |
| <p>2. Which is more?</p>  | <p>4. Which is less?</p>  |



II. Draw a line to match the following number words to their correct numerals. (5pts)

| | | | |
|----|-------|---|----|
| 5. | zero | • | 2 |
| 6. | ten | • | 3 |
| 7. | two | • | 9 |
| 8. | three | • | 0 |
| 9. | nine | • | 10 |


III. Look at the objects below from left to right. (6pts)



a. Color the correct ordinal number of the given shapes on the left.

| | | | |
|-----|---|-------------|------------|
| 10. |  | 2nd | 3rd |
| 11. |  | 10th | 6th |
| 12. |  | 4th | 5th |
| 13. |  | 1st | 7th |

b. Draw the shape being asked.



| | |
|--|---|
| 14. What shape is in the 3rd position? | 16. What shape is in the 10th position? |
| 15. What shape is in the 1st position? | 17. What shape is in the 8th position? |

IV. Compare the following numbers using the symbols (>, <, or =). Write your answer inside the circle. (6pts)

| | |
|-----------|-----------|
| 18. 6 ○ 3 | 21. 7 ○ 7 |
| 19. 1 ○ 8 | 22. 3 ○ 4 |
| 20. 2 ○ 9 | 23. 7 ○ 1 |

V. Write the correct number word of the following numerals. (3pts)

| | | |
|--|--|--|
| 24. <div style="border: 1px solid black; border-radius: 10px; padding: 5px; display: inline-block;">6</div> _____ | 25. <div style="border: 1px solid black; border-radius: 10px; padding: 5px; display: inline-block;">7</div> _____ | 26. <div style="border: 1px solid black; border-radius: 10px; padding: 5px; display: inline-block;">5</div> _____ |
|--|--|--|

VI. Arrange the following numbers. Write your answer inside the box.

A. greatest to least (2 pts.)

| |
|--|
| 27. <div style="display: inline-block; border: 1px solid black; border-radius: 50%; padding: 10px; margin: 2px;">2</div> <div style="display: inline-block; border: 1px solid black; border-radius: 50%; padding: 10px; margin: 2px;">4</div> <div style="display: inline-block; border: 1px solid black; border-radius: 50%; padding: 10px; margin: 2px;">3</div> <div style="display: inline-block; border: 1px solid black; border-radius: 10px; width: 40px; height: 30px; margin: 2px;"></div> <div style="display: inline-block; border: 1px solid black; border-radius: 10px; width: 40px; height: 30px; margin: 2px;"></div> <div style="display: inline-block; border: 1px solid black; border-radius: 10px; width: 40px; height: 30px; margin: 2px;"></div> |
| 28. <div style="display: inline-block; border: 1px solid black; border-radius: 50%; padding: 10px; margin: 2px;">6</div> <div style="display: inline-block; border: 1px solid black; border-radius: 50%; padding: 10px; margin: 2px;">10</div> <div style="display: inline-block; border: 1px solid black; border-radius: 50%; padding: 10px; margin: 2px;">5</div> <div style="display: inline-block; border: 1px solid black; border-radius: 10px; width: 40px; height: 30px; margin: 2px;"></div> <div style="display: inline-block; border: 1px solid black; border-radius: 10px; width: 40px; height: 30px; margin: 2px;"></div> <div style="display: inline-block; border: 1px solid black; border-radius: 10px; width: 40px; height: 30px; margin: 2px;"></div> |

B. least to greatest (2 pts.)

| |
|---|
| 29. <div style="display: inline-block; border: 1px solid black; border-radius: 50%; padding: 10px; margin: 2px;">9</div> <div style="display: inline-block; border: 1px solid black; border-radius: 50%; padding: 10px; margin: 2px;">5</div> <div style="display: inline-block; border: 1px solid black; border-radius: 50%; padding: 10px; margin: 2px;">3</div> <div style="display: inline-block; border: 1px solid black; border-radius: 10px; width: 40px; height: 30px; margin: 2px;"></div> <div style="display: inline-block; border: 1px solid black; border-radius: 10px; width: 40px; height: 30px; margin: 2px;"></div> <div style="display: inline-block; border: 1px solid black; border-radius: 10px; width: 40px; height: 30px; margin: 2px;"></div> |
| 30. <div style="display: inline-block; border: 1px solid black; border-radius: 50%; padding: 10px; margin: 2px;">8</div> <div style="display: inline-block; border: 1px solid black; border-radius: 50%; padding: 10px; margin: 2px;">2</div> <div style="display: inline-block; border: 1px solid black; border-radius: 50%; padding: 10px; margin: 2px;">4</div> <div style="display: inline-block; border: 1px solid black; border-radius: 10px; width: 40px; height: 30px; margin: 2px;"></div> <div style="display: inline-block; border: 1px solid black; border-radius: 10px; width: 40px; height: 30px; margin: 2px;"></div> <div style="display: inline-block; border: 1px solid black; border-radius: 10px; width: 40px; height: 30px; margin: 2px;"></div> |