





Name _____


TWO-STEP PROBLEMS.



35¢



57¢



12¢


48¢













63¢


39¢


24¢


41¢

Find the total cost. Find how many cents in change.

<p>1. Bought  </p> <p style="margin-left: 40px;">Total cost _____ ¢</p>	<p>Had 45¢</p> <p style="margin-left: 40px;">Change _____ ¢</p>
<p>2. Bought  </p> <p style="margin-left: 40px;">Total cost _____ ¢</p>	<p>Had 89¢</p> <p style="margin-left: 40px;">Change _____ ¢</p>
<p>3. Bought   </p> <p style="margin-left: 40px;">Total cost _____ ¢</p>	<p>Had 95¢</p> <p style="margin-left: 40px;">Change _____ ¢</p>
<p>4. Bought  </p> <p style="margin-left: 40px;">Total cost _____ ¢</p>	<p>Had 99¢</p> <p style="margin-left: 40px;">Change _____ ¢</p>
<p>5. Bought  </p> <p style="margin-left: 40px;">Total cost _____ ¢</p>	<p>Had 98¢</p> <p style="margin-left: 40px;">Change _____ ¢</p>