


Addition Word Problems

Name:



There are 3 black mice.




4 white mice playing.

How many mice are playing?




There are 5 blue gems and



3 green gems.

How many gems are there in total?



There are 2 apples and



4 oranges on the table.

How many fruits are there on the table?



Zain ate 3 pink cupcakes and



2 blue cupcakes.

How many cupcakes did Zain eat?



There are 2 red cars and



2 yellow cars.

How many cars are there in total?