

Section 4 — Odd One Out

Each of the questions below has five figures.
Find which figure in each row is most unlike the others.

Example:



a



b



c



d



e

Answer: b

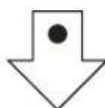
1



a



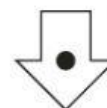
b



c



d



e

2



a



b



c



d

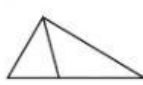


e

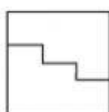
3



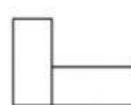
a



b



c



d



e

4



a



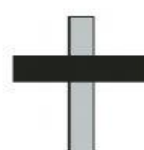
b



c



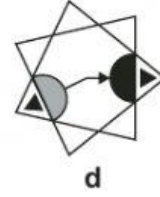
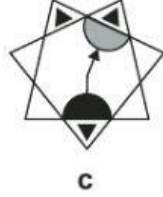
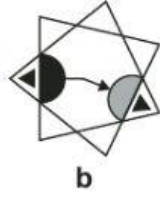
d



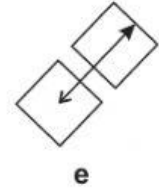
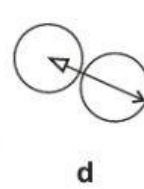
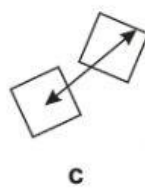
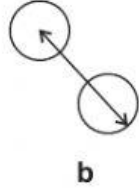
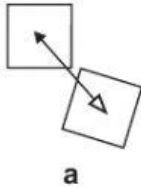
e

Carry on to the next question → →

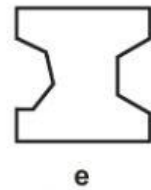
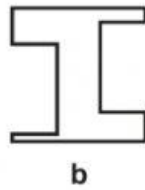
5



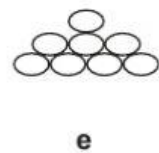
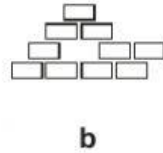

6



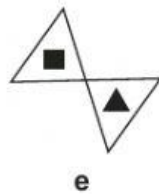

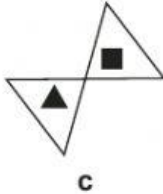
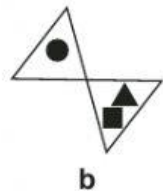
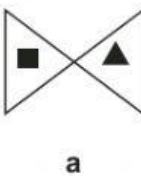
7



8



9



10



/ 10

Carry on to the next question → →