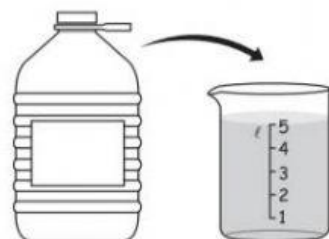
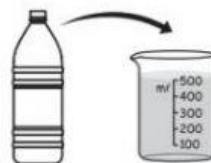


J Compare the capacities of different containers.

1. Which bottle has a greater capacity?



Bottle A



Bottle B

The capacity of bottle A is _____.

The capacity of bottle B is _____.

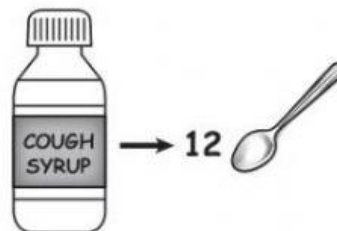
The capacity of bottle A is _____ than the capacity of bottle B by _____.

Bottle _____ has a greater capacity.

2. Which container has a smaller capacity?



Perfume bottle
30 mL



Medicine bottle

The capacity of the perfume bottle is _____ mL.

The capacity of the medicine bottle is _____ teaspoons or _____ mL.

The capacity of the perfume bottle is _____ than the capacity of the medicine bottle by _____.

The _____ has a smaller capacity.