

**Ch – 12 Geometry (Lesson-10)**

Concept cum Practice as Exit Tickets

Grade 5 Elite Maths

United Arab Emirates  
Ministry of Education



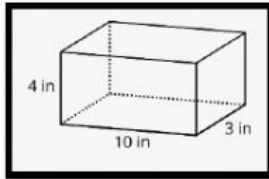
Name:

Date:27/05/2020

Learning objective – To Find the Volume of Rectangular Prism

Select the correct name for the following objects


1) Fig – 1



5) Fig – 5



2) Fig – 2



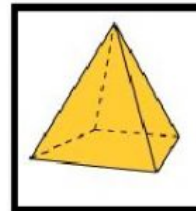
6) Fig – 6



3) Fig – 3



7) Fig – 7



4) Fig – 4



8) Fig – 8

