







unit 3 natural environment

Match columns

1. Environment	a) To die out
2. Ecosystem	b) Surroundings
3. Habitat	c) Decayed plant or animal matter
4. Extinct	d) The spread of desertlike conditions
5. Humus	e) The place where a plant or animal lives
6. Desertification	f) A group of plants and animals that depend on each other for survival

Identify the image with the concept

1 	2 
3 	4 
5 	6 

- _____ 1. Triggers the ecosystem cycle.
- _____ 2. An animal that eats meat or plants.
- _____ 3. A living organism produces its own food.
- _____ 4. An animal that only eats plants.
- _____ 5. An animal that eats small preys.
- _____ 6. An animal that is considered a predator.

Complete the ideas.

Limits on life – decomposer –
erosion – fertility - soils

_____ such factor are temperature, rainfall, and soil conditions.

_____ help to determine what plants will grow and how well.

_____ from wind or water can sweep topsoil away.

Planting the same crops over and over can also rob soil of its
