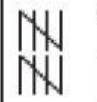




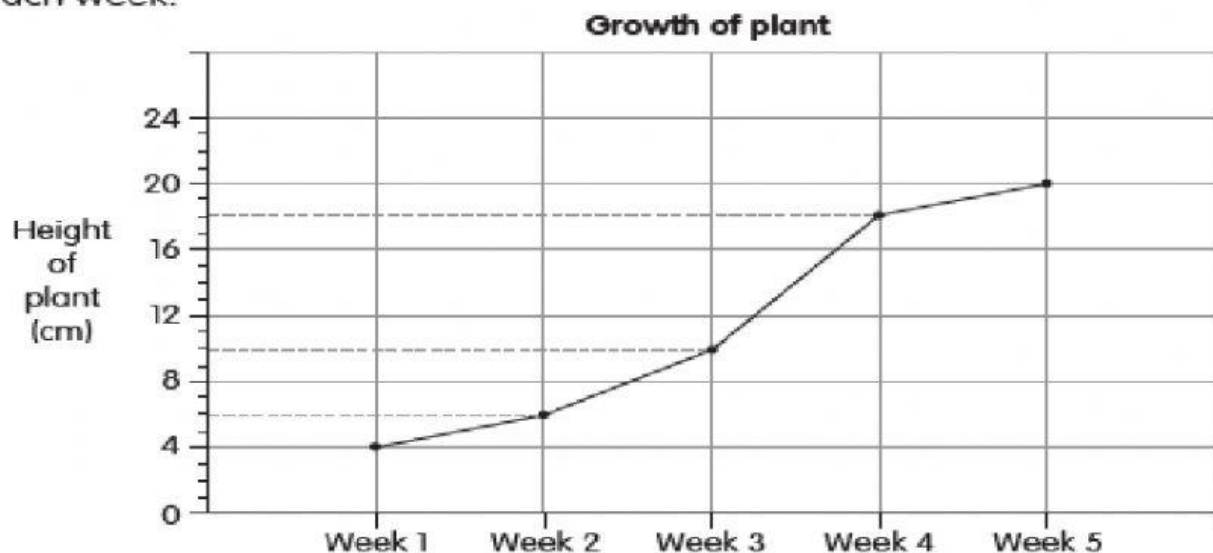


- 1 Akif collects data on the number of storybooks his classmates read in a certain week. He tallies the responses as shown below.

1 storybook	2 storybook	3 storybook	4 storybook	5 storybook
 <input type="text"/>	 <input type="text"/>	 <input type="text"/>	 <input type="text"/>	 <input type="text"/>

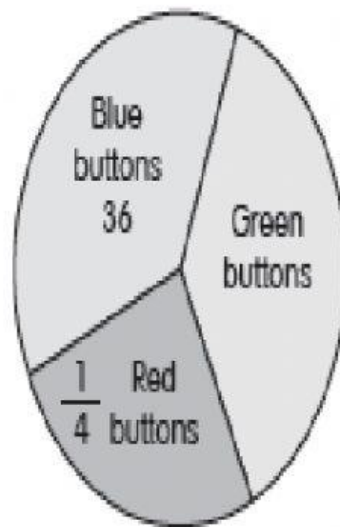
- 2 Meena measures the height of a plant over a 5-week period to track its growth.
 The line graph shows the height of the plant in centimetres at the end of each week.



- (a) What was the height of the plant at the end of Week 1?
-
- (b) What was the increase in the height of the plant from the end of Week 2 to Week 3?
-
- (c) In which week did the plant grow the fastest?
 What was the increase in its height?
-
- (d) In which two weeks was the increase in the plant's height the same?
-

Pie Chart

- 1 The pie chart below shows the different colours of buttons that Meha has. She has an equal number of blue and green buttons.



- (a) What fraction of the buttons are blue buttons and green buttons altogether?
- (b) What fraction of the buttons are blue?
- (c) How many red buttons does she have?