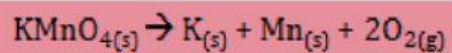


Nama:

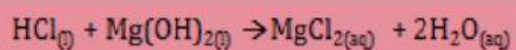
Kelas:

Jodohkanlah reaksi dibawah ini dengan jenis perubahan entalpi yang tepat !

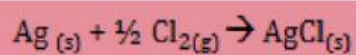
$$\Delta H^{\circ}f = 235 \text{ Kj/mol}$$



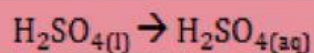
$$\Delta H^{\circ}c = 127 \text{ Kj/mol}$$




$$\Delta H^{\circ}d = 321 \text{ Kj/mol}$$



$$\Delta H^{\circ}n = 235 \text{ Kj/mol}$$



$$\Delta H^{\circ}\text{sol} = 235 \text{ Kj/mol}$$



**Ayuk semangat !!!**

