



NAME

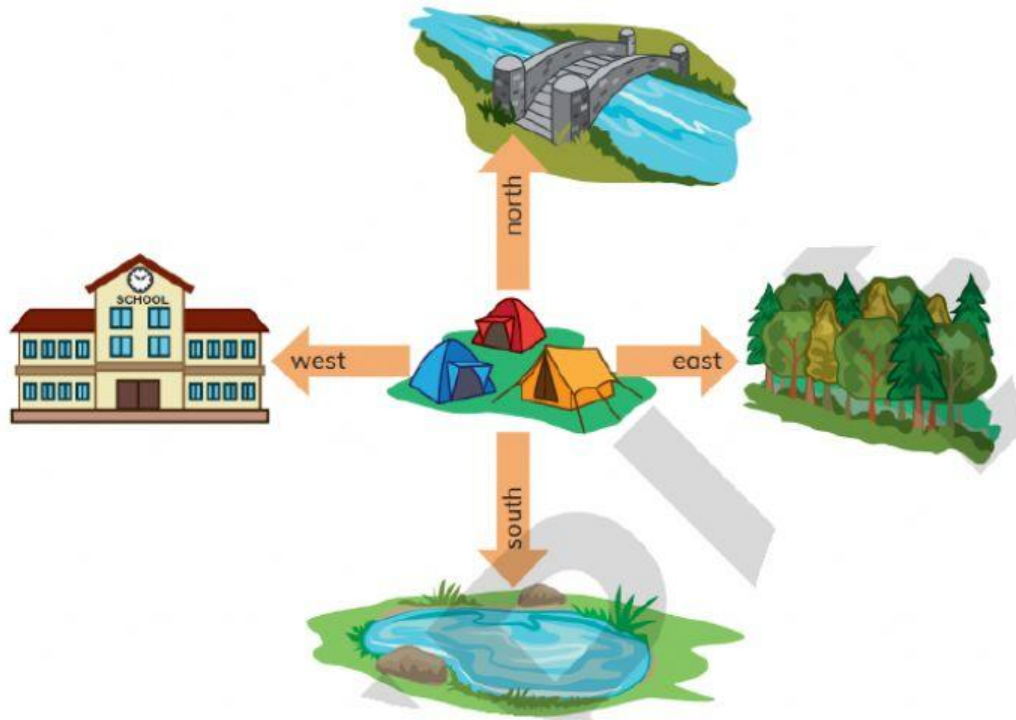
CLASS

- 1 Count the right angles inside these shapes.
Mark them.



NAME CLASS

You are at the campsite.



You are at the campsite. _____

- a What can you see if you look west? _____
- b What can you see if you look south? _____
- c In which direction is the bridge? _____
- d In which direction is the forest? _____

Now face west.

Which direction are you facing if you turn

- e two right angles clockwise? _____
- f one right angle anticlockwise? _____
- g three right angles clockwise? _____