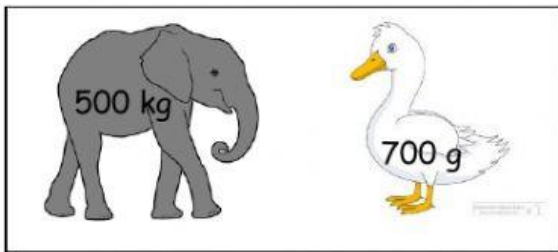



a) Compare the mass of each pair and click on the heavier mass.



500 kilograms

700 grams



600 grams

6 kilograms

b) Look at the mass and choose the correct answer



The mass of the boy is



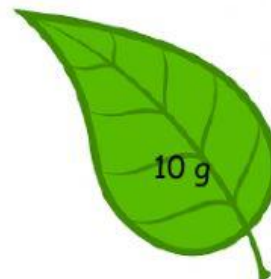
The mass of the walking stick is

c) Listen to the voice-over and state 'True' or 'False'



True

False



True

False