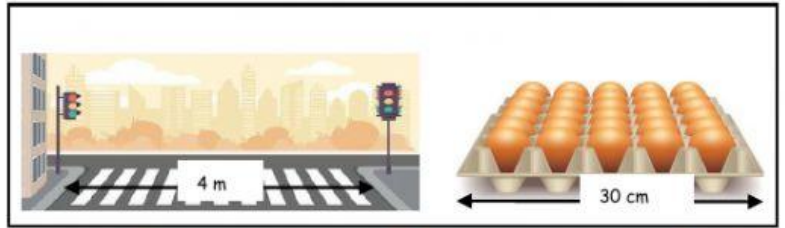


a) Compare each of the following length and click on the longer length.



3 metres

25 centimetres



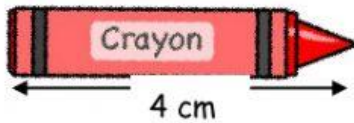
30 centimetres

4 metres

b) Read the length of the image and choose the correct answer



The length of the car is



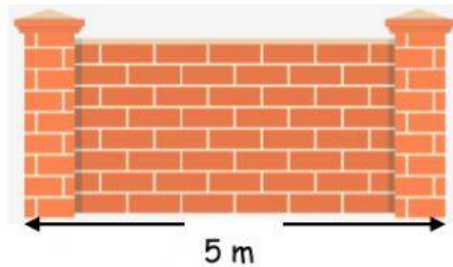
The length of the crayon is

c) Listen to the voice-over and state 'True' or 'False'



True

False



True

False