

Name: \_\_\_\_\_

Date: \_\_\_\_\_







1. 62 beetles were under a log.  
12 beetles crawled away.  
How many beetles were left? \_\_\_\_\_
2. A ladybug ate 15 aphids on Monday.  
She ate 16 aphids on Tuesday. How  
many aphids did she eat altogether? \_\_\_\_\_
3. 44 butterflies rested in a tree. 9 butterflies  
rested on a bush. How many butterflies  
were there in all? \_\_\_\_\_
4. There were 37 ants on the ground.  
22 of the ants crawled into a hole. How  
many ants did not crawl into the hole? \_\_\_\_\_
5. In the forest, there were 29 stag beetles  
and 42 ground beetles. How many  
beetles altogether? \_\_\_\_\_
6. A spider trapped insects in her web. She  
caught 12 flies, 8 wasps, and 5 moths.  
How many insects did she trap? \_\_\_\_\_

After to do the exercise choose what could be the title?

**The seashore**

**Bugs**

**Garden**

1. 17 children were swimming. 11 children were looking for shells. 6 children were playing in the sand. How many children were there in all? \_\_\_\_\_
2. There were 28 shells on the beach. The tide washed 15 shells away. How many were left? \_\_\_\_\_
3. Tim found 51 seashells. Talia found 15. How many more shells did Tim find than Talia? \_\_\_\_\_
4. Laura found 14 sand dollars, 6 pieces of driftwood, and 3 starfish. How many things did she find altogether? \_\_\_\_\_
5. There were 34 children playing on the beach. 18 of them stopped to eat lunch. How many of the children were not eating lunch? \_\_\_\_\_
6. There were 7 pelicans on the rocks. 39 seagulls were flying overhead. How many pelicans and seagulls were there in all? \_\_\_\_\_

After to do the exercise choose what could be the title?

**The seashore**

**Bugs**

**Garden**

1. Darrell planted 3 rows of carrots, 1 row of beans, 2 rows of radishes, and 4 rows of corn. How many rows did he plant altogether? \_\_\_\_\_
2. Darrell set out 46 tomato plants. Cutworms killed 27 of the plants. How many plants were left? \_\_\_\_\_
3. Darrell planted 28 radish seeds. Then he planted 19 more. How many radish seeds did he plant in all? \_\_\_\_\_
4. It took Darrell 15 minutes to pull weeds, 10 minutes to hoe, and 20 minutes to water the plants. How many minutes did he work altogether? \_\_\_\_\_
5. 90 ears of corn grew in the garden. Darrell picked 38 ears. How many ears were left? \_\_\_\_\_

After to do the exercise choose what could be the title?

**The seashore**

**Bugs**

**Garden**