

## 11. AREA AND ITS BOUNDARY

Class: V

Worksheet - 6


Subject: Maths

Name: \_\_\_\_\_

Date: \_\_\_\_\_

Find the area by counting the squares.

1.




Area: \_\_\_\_\_

2.



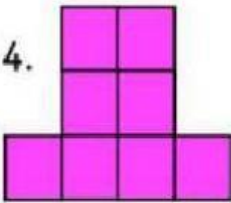
Area: \_\_\_\_\_

3.




Area: \_\_\_\_\_

4.



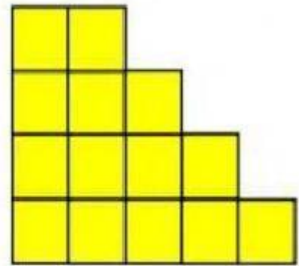
Area: \_\_\_\_\_

5.



Area: \_\_\_\_\_

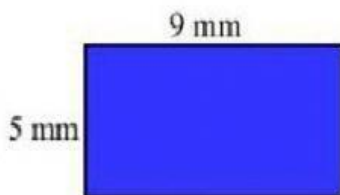
6.



Area: \_\_\_\_\_

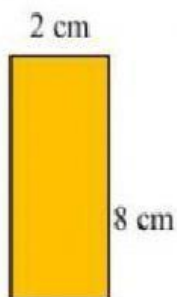
Find the area by multiplying the length x width.

7.



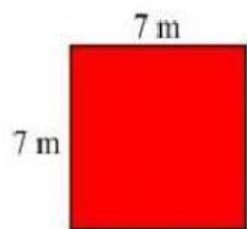
Area: \_\_\_\_\_ mm<sup>2</sup>

8.



Area: \_\_\_\_\_ cm<sup>2</sup>

9.



Area: \_\_\_\_\_ m<sup>2</sup>