

11. AREA AND ITS BOUNDARY

Class: V

Worksheet - 3

Subject: Maths

Name: _____

Date: _____

Work out the area and perimeter of the following rectangles.

They are not to scale. Remember - **area inside** and **perimeter outside**.

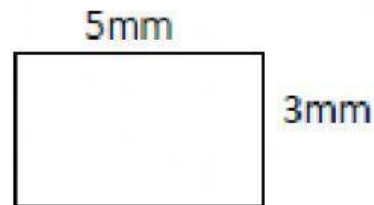
1)



Area = _____ square cm

Perimeter = _____ cm

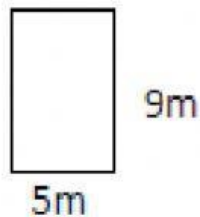
2)



Area = _____ square mm

Perimeter = _____ mm


3)



Area = _____ square m

Perimeter = _____ m

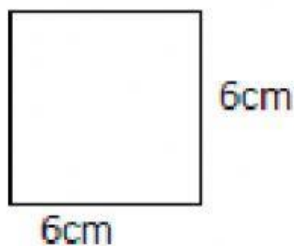
4)



Area = _____ square ft

Perimeter = _____ ft

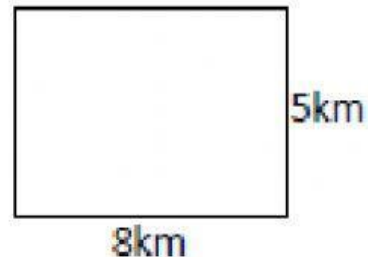
5)



Area = _____ square cm

Perimeter = _____ cm

6)



Area = _____ square km

Perimeter = _____ km