

SECTION A

1.

$8 \times 3 =$ _____ groups of 4

(1) 11

(2) 24

(3) 5

(4) 6

2.

Which of the following shapes make up the figure?



(1) circle, triangle, rectangle, square

(2) triangle, semicircle, square, circle





(3) rectangle, semicircle, circle, triangle

(4) square, triangle, rectangle, semicircle


3. Study the pattern below.



Which of the following shapes comes next?

- (1) 
- (2) 
- (3) 
- (4) 

4. Based on what is shown in the diagram, what is the length of the pencil?



- (1) 8 cm
- (2) 2 cm
- (3) 10 cm
- (4) 12 cm

5.


Edward has 18 marbles.
He has twice as many marbles as Henry.
How many marbles does Henry have?

- (1) 6
- (2) 9
- (3) 20
- (4) 36

SECTION B

1

The picture graph below shows the number of marbles collected by 4 boys. Answer questions 1 and 2 based on the picture graph.



How many fewer marbles did Henry collect than Fred?

Ans :

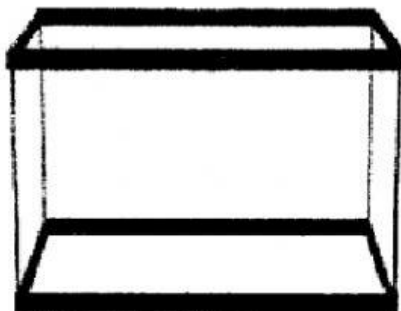
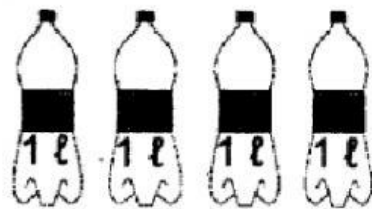

2

How many marbles did the 4 boys collect altogether?

Ans:

3.

The diagrams below show the number of bottles of water needed to fill a pail completely.



?

A fish tank holds three times as much water as a pail.
How much water fills a fish tank completely?

Ans :

 l

4	<p>Sue has 249 stamps. She has 136 more stamps than Tom. How many stamps do they have altogether?</p> <p style="text-align: right;">Ans : <input data-bbox="1002 465 1165 544" type="text"/></p>
5	<p>Mrs Gopal needs 800 g of curry powder to make a pot of curry chicken. She has 381 g of curry powder. How much more curry powder does she need?</p> <p style="text-align: right;">Ans: <input data-bbox="989 1003 1152 1081" type="text"/> g</p>