

Science

Evaluation II

1st semester School Year 2022-2023
Primary I



Name :

Class :

Date :

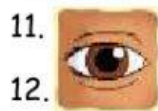
Period :

Nilai	TTG	TTO

A. Choose the correct answer.

1. We have ____ arms.
 - a. 2
 - b. 4
 - c. 1
2. We have ____ eyes.
 - a. 3
 - b. 2
 - c. 1
3. We have ____ fingers.
 - a. 10
 - b. 2
 - c. 1
4. We have ____ tongue.
 - a. 2
 - b. 10
 - c. 1
5. We have ____ legs.
 - a. 3
 - b. 4
 - c. 2
6. We use our ____ to hear sounds.
 - a. eyes
 - b. nose
 - c. ears
7. The ____ are in the soil.
 - a. stem
 - b. roots
 - c. leaf
8. A cat is a _____.
 - a. Non-living thing
 - b. Living things.
 - c. A flower
9. A pencil is a _____.
 - a. non-living thing
 - b. living thing
 - c. an animal
10. We use our ____ to see.
 - a. nose
 - b. eyes
 - c. ears

B. Circle the correct sense organ and the sense based on the picture given.



11. Sense organ : eyes nose mouth



12. Sense : taste sight hearing



13. Sense organ : nose tongue ear







14. Sense : taste smell hearing




15. Sense organ : nose tongue skin



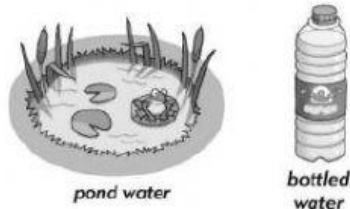
16. Sense : sight smell touch

- | | | | | | |
|-----|---|---------------|-------|--------|-------|
| 17. |  | Sense organ : | nose | tongue | skin |
| 18. |  | Sense : | sight | touch | taste |
| 19. |  | Sense organ : | nose | tongue | skin |
| 20. |  | Sense : | taste | smell | touch |

C. Sort the picture from the youngest to the oldest by writing number 1 to 6.



D. Which is a healthy source water? Circle



E. Put a check on the healthy food.

