


Name: _____

Numeracy

Grade 1syl

A. Match these




Fifth

11

fifteen

5th

second



eleven

2nd

thirteen

B. Choose the correct answer

1. 8

a. Eight

b. eighth

c. eighty

2. 12

a. Twelve

b. tweleve

c. twenty



3. 7

a. Sven

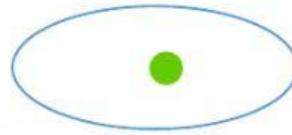
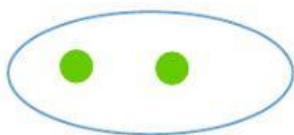
b. seven

c. sevn

4. Which one is one more than 5



5. Which one is one less than 1



C. Write the correct answer




1. 1 less than 7 is

2. 1 more than 9 is


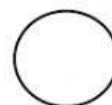
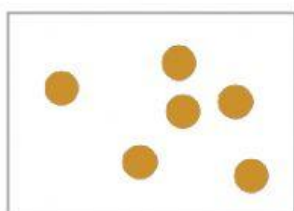
3. 2 more than 3 is

D. Put the correct sign = , < or >



1.



2.



3.



E. Determine the position



2 nd

yellow

forth

orange

- a. Which colour boat finish 1st _____.
- b. What position is the blue boat _____.
- c. Which position is the boat after the orange boat _____.
- d. What colour boat came third _____.