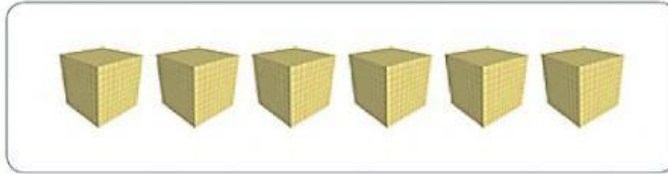



## MATH REVIEW 1

1. Look and choose the number



- A. 5,000
- B. 500
- C. 50,000

2. Look and choose the number



- A. 1,327
  - B. 7,321
  - C. 7,231
3. How is five thousand, one hundred eleven written in numbers?
- A. 5,121
  - B. 5,011
  - C. 5,111
4. How is eight thousand, three hundred fifty-one written in numbers?
- A. 8,315
  - B. 8,351
  - C. 5,531
5. How do you write 3,642 in words?
- A. Three thousand six hundred forty-one
  - B. Three thousand, six hundreds forty-one
  - C. Three thousand, six hundred forty-two
6. How do you write 2,723 in words?
- A. Two thousands, seven hundreds twenty-three
  - B. Two thousand, seven hundred two-three
  - C. Two thousand, seven hundred twelve-three
  - D. Two thousand, seven hundred twenty-three
7. In the number 5,341. What is the name of number 5
- A. O
  - B. H
  - C. T

D. Th

8. In the number 5,341. What is the name of number 3







A. O


B. H

C. T

D. Th

This picture is for question 9+10

	A	B	C	D	E
1					
2					
3					
4					
5					

9. It's one square to the left and four squares above the 



10. It's located in square B4

