

Quiz

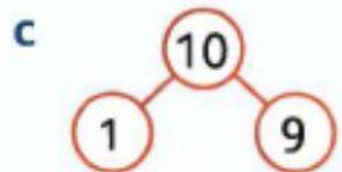
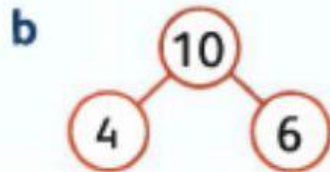
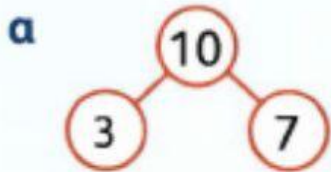
1 Complete these number sentences:

a $4 + 7 = 11$ so $\square - \square = 4$

b $5 + 6 = 11$ so $\square - 6 = \square$

c $8 + 3 = 11$ so $\square - \square = \square$

2 Write the addition and subtraction facts for each of these.



3 True or false?

a $12 + 8 = 20$ b $14 + 5 = 20$ c $7 + 12 = 20$ d $8 + 12 = 20$

4 Complete these additions and subtractions.

a $11 + 6 = \square$

b $9 + 8 = \square$

c $15 - \square = 11$

d $6 + \square = 17$

e $20 - 8 = \square$

f $15 - 7 = \square$

5 There are 14 goats on the mountain. Five more goats arrive. How many goats are on the mountain now?

6 Complete each number sentence.

a $3 + 5 = 8$, so $30 + 50 = \square$

b $4 + 3 = 7$, so $40 + \square = 70$

c $5 + 5 = 10$, so $\square + \square = 100$

d $8 + 2 = 10$, so $\square + \square = 100$