

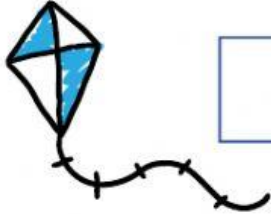


NOME: _____

Prof: _____

Atividade Diagnóstica - 1º ano

1 - DITADO DE NÚMEROS:



--	--	--	--	--	--

2 - COMPLETE O QUADRO NUMÉRICO:

0			3						9
	11				15				
20									
									39
40									



3 - ESCREVA OS NÚMEROS:

DOIS -

SETE -

QUATRO -

UM -

OITO -



TRÊS -

CINCO -

NOVE -

SEIS -

DEZ -

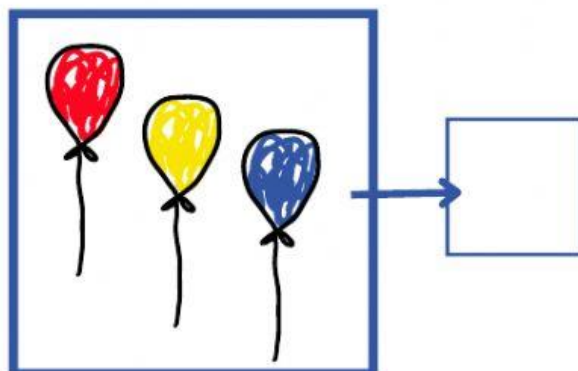
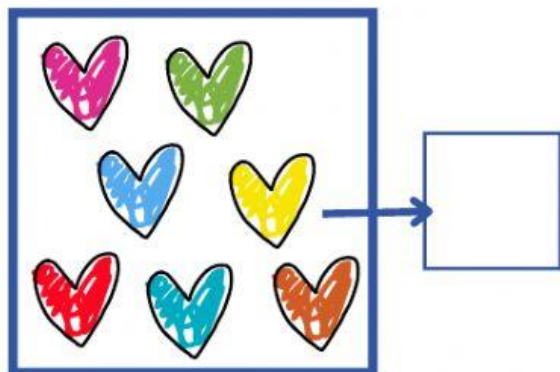
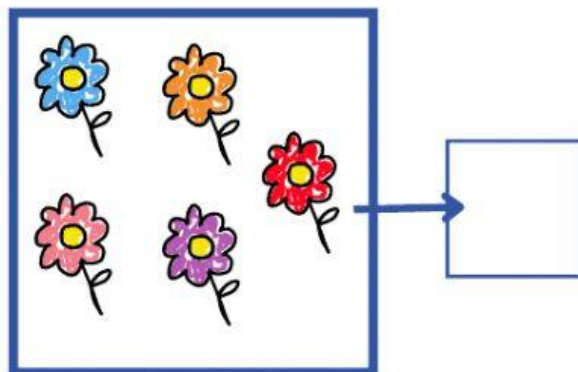
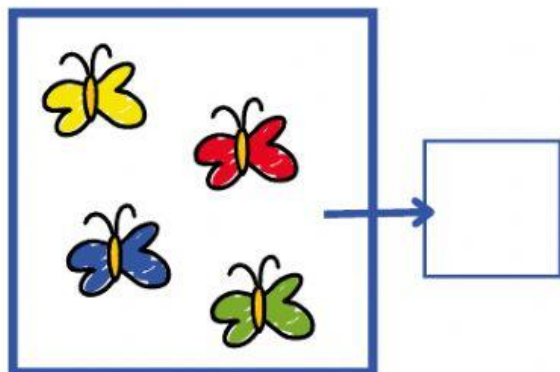


4 - QUEM VEM ANTES E QUE VEM DEPOIS:

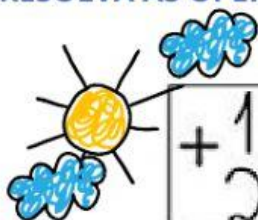
	5	
	9	

	11	
	18	

5 - QUAL É A QUANTIDADE:



6 - RESOLVA AS OPERAÇÕES:



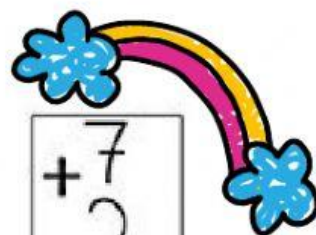
$$\begin{array}{r} +1 \\ 2 \\ \hline \end{array}$$

$$\begin{array}{r} +2 \\ 2 \\ \hline \end{array}$$

$$\begin{array}{r} +3 \\ 4 \\ \hline \end{array}$$

$$\begin{array}{r} +6 \\ 2 \\ \hline \end{array}$$

$$\begin{array}{r} +7 \\ 2 \\ \hline \end{array}$$



$$\begin{array}{r} 7 \\ -4 \\ \hline \end{array}$$

$$\begin{array}{r} 5 \\ -3 \\ \hline \end{array}$$

$$\begin{array}{r} 4 \\ -1 \\ \hline \end{array}$$

$$\begin{array}{r} 6 \\ -2 \\ \hline \end{array}$$

$$\begin{array}{r} 9 \\ -1 \\ \hline \end{array}$$

