

# Volume Bangun Datar

## Sisi Ruang

Sebelum mengerjakan kuis, pahami video pembelajaran terlebih dahulu!

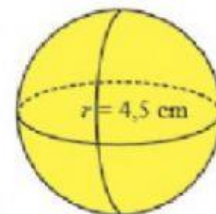
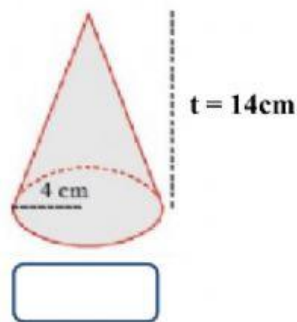
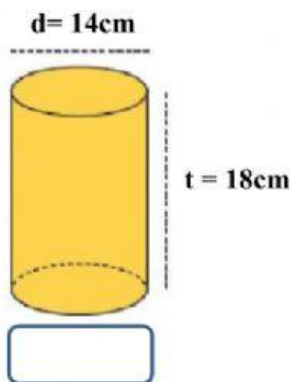
Video Pembelajaran

<https://youtu.be/QZlr49NRV8w>

### Kuis 1

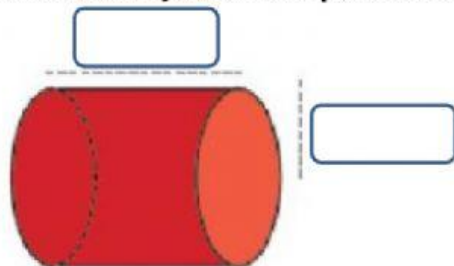
Pilihlah jawaban yang!

3. Tentukan volume bangun di bawah ini!



- a. 381.8cm      c. 821.8cm  
b. 388.1cm      d. 318.8cm

2. Pindahkan jawaban pada kotak kosong!

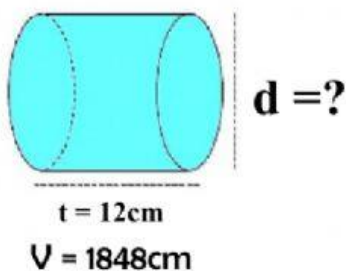


9cm

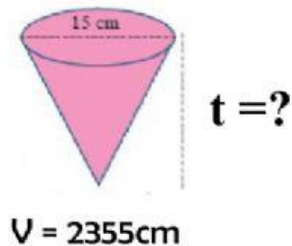
8cm

$V = 648\pi$

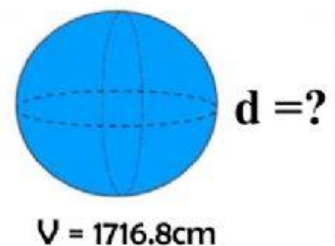
1. Tariklah garis pada jawaban yang benar!



9 cm



10 cm



14 cm