

NAME: _____ DATE: _____ LIST N° _____ MARK: _____






1-TICK the correct word to make the sentences true

- a. All living organisms are made up of microscopic units called **cells/organs/tissues**.
- b. **Prokaryotic cells/ Eukaryotic cells/ Multicellular organisms** do not contain a nucleus.
- c. Tissues are groups of **cells/organs/systems**.
- d. Organs are made up of **systems/tissues/the heart**.
- e. The heart is a **system/ organ / tissue**.

2-NAME one word to match the description.

- a. Reproduction by one individual. _____
- b. Feeds on other living organisms to obtain nutrients _____
- c. A basic unit of life _____
- d. Living organism that is made up of many cells _____
- e. Kingdom in which all the organisms are unicellular with a prokaryotic cell. _____

3-WRITE the levels of organization and MATCH it to the definitions:

		Group of cells of the same kind.
		Group of organs that work together to perform a function.
		Basic unit of structure and function of all living things.
		Individual living thing.
		Structure composed of one or more types of tissues.

4- FILL the chart

	PLANTAE	ANIMALIA
Cell structure		
Cell organization		
Nutrition		

NAME: _____ DATE: _____ LIST Nº _____ MARK: _____

5-JOIN the correct statements:**AUTOTROPHIC**

When living organisms feed on other living organisms or organic matter to obtain nutrients.

SENSE ORGANS

Is when living organisms obtain their nutrients from water, carbon dioxide and sunlight.

NERVOUS SYSTEM

Detect changes in the environment.

LOCOMOTOR SYSTEM

Connected to the brain receives information and coordinates the response.

HETEROTROPHIC

Moves the body.

6-CLASSIFY: Which kingdom of living beings do the following belong to?

a)



b)



c)



d)



e)

NAME: _____ DATE: _____ LIST Nº _____ MARK: _____

7- TICK the correct options (1 point)

Bacteria is **eukaryotic/prokaryotic**. Bacteria **have got/ haven't got** a nucleus. Bacteria are **unicellular/multicellular**. You can see them with **the naked eye/a microscope**. Bacteria **can/ can't** survive in extreme conditions.

8- Join one way that bacteria are helpful to us and one that they are harmful to us (1 point)**Helpful**

Bacteria can contaminate food and cause diseases

Harmful

The bacteria in our intestines help us to digest food.

9- CHOOSE the correct WORDS from the BOX (1 point)

unicellular heterotrophic Protoctista malaria bacteria


Protozoa are organisms that belong to the 1.
kingdom. Protozoa have a nucleus. They are only made up of one cell
though. This means that they are 2.
Protozoa feed off other living organisms, they are 3.
Some protozoa, such as ciliates, eat harmful 4.
and are used to treat sewage. Other protozoa can cause serious
diseases, such as 5.

10- TRUE (T) or FALSE (F)?

- a. Algae belong to the Fungi Kingdom _____
- b. Protozoa has eukaryotic cells _____
- c. Seaweed is unicellular algae _____
- d. Protozoa belongs to the Protoctista Kingdom _____
- e. Algae release oxygen into the atmosphere and oceans _____

11- MATCH the PARTS of the flower TO their FUNCTION

- 1. FLOWERS _____ A) The female part of the flower
- 2. PISTIL _____ B) The female reproductive cells
- 3. OVULES _____ C) The male reproductive cells
- 4. STAMEN _____ D) The male part of a flower
- 5. POLLEN _____ E) The part of the plant containing the reproductive structures

NAME: _____ DATE: _____ LIST N^o _____ MARK: _____**12- LABEL the PARTS of the plant.**

Nutrition in plants