















Money

1. Fill in the table below:

Using dollars and cents	Using decimal points
\$5 and 25c	\$
\$20 and 50c	\$
\$	\$14.75

2. Add the money and write the total:

      	\$ _____
      	\$ _____

3. Complete the table below:

Question	Total amount spent	Change from \$10
I spend \$7.30 on a cinema ticket and I buy a chocolate bar for 60c.	\$	\$
I buy colouring pencils for \$6.50 and a pencil sharpener for \$2.25.	\$	\$